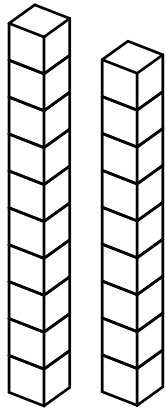


# Counting Base 10 Blocks Worksheet #2-4

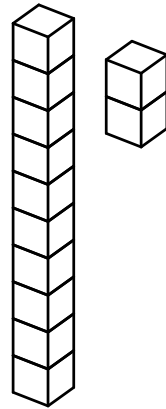
## Solutions

1)



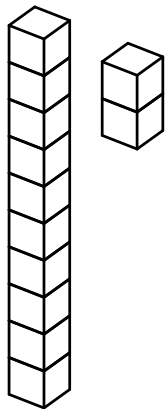
19

2)



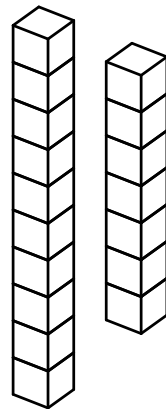
12

3)



12

4)



17